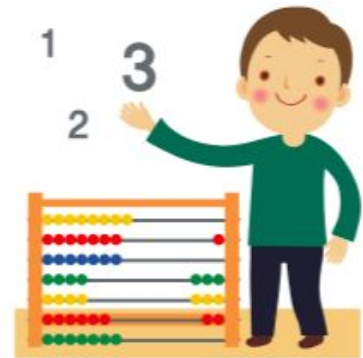


**my
may
math JOURNAL**



By: _____

At the farm 4 cows were in the barn. 2 were in the field. 2 were sleeping.
How many cows altogether?

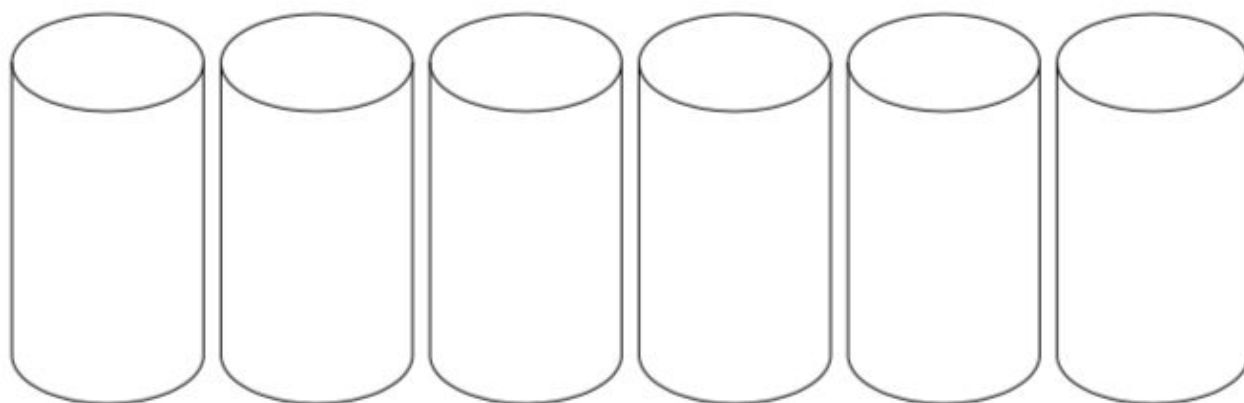
1

The farmer milked 5 cows in the morning and 2 in the afternoon.
How many cows did he milk altogether?

2

4 horses were pulling the wagon. How many legs were pulling the wagon?

I can color silos in an _____ pattern.



4

The goat ate 5 handfuls of food. He ate 7 more later.
How many handfuls did he eat?

5

7 whales were in the water. 2 swam away. How many whales are left?

I can make an _____ pattern with starfish.



The fisherman caught some fish. Some were blue and some were orange. 3
What did he catch?

8

We see a starfish with 5 arms. How many arms will 3 starfish have?

9

One student found 9 seashells. Another student found 2 seashells.
How many seashells did they find altogether?

10


5 rhinos were eating grass. 2 more joined them.
How many rhinos are there altogether?

12

A giraffe reached up to a tree with 9 leaves. He ate 7 of them.
How many leaves are left on the tree?

13

I can make an ____ pattern with elephants.






15

A friend was above the pool. Another friend was in the pool.

3 students like to go swimming, 1 likes to read and 1 likes to ride his bike.

Fill in the graph.

SWIM					
READ					
BIKE					

17

I can make a pattern with beach balls. Label your pattern with letters.



18

1 student is wearing sunglasses. 5 more students put sunglasses on.
How many students have sunglasses on?

3 students like to go swimming, 2 students like diving, 5 students like water slides.

Fill in the graph!

Favorite Water Activity			
	<u>Swimming</u>	<u>Diving</u>	<u>Water Slides</u>

20

The ice cream cone had 6 scoops. 4 fell off. How many are left?

20

10 library books were checked out. We returned 3. How many are left?

20

Make up your own problem! Use beach balls.

20